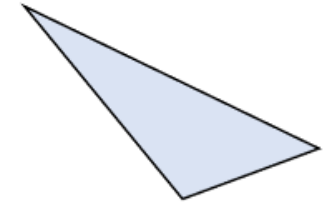


Flashback 4


Year 5 | Week 9 | Day 2

- 1) Fill in the missing number.


$$2.5 \text{ kg} = \boxed{2,500} \text{ g}$$



- 2) Reflect the shape in the mirror line.



- 3) Calculate the missing angle.



158°

- 4) Round 12,471 to the nearest hundred.

12,500