


Add equal groups

I Complete the sentences.



There are apples in each bag.

There are bags.

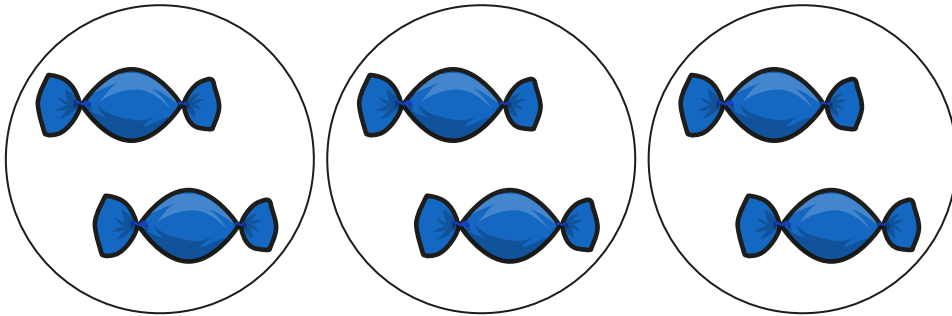
There are equal groups of

There are apples altogether.

$$\boxed{5} + \boxed{5} + \boxed{5} + \boxed{5} = \boxed{20}$$




2 How many sweets are there?



$$\boxed{2} + \boxed{2} + \boxed{2} = \boxed{6}$$

There are sweets.

3 How many marbles are there?




$$\boxed{10} + \boxed{10} + \boxed{10} = \boxed{30}$$

There are marbles.



- 4 How many candles are there?



$$\boxed{2} + \boxed{2} + \boxed{2} + \boxed{2} = \boxed{8}$$

There are candles.

- 5 Use counters to show the equal groups.

Complete the number sentences.

a) $2 + 2 + 2 + 2 = \boxed{8}$

b) $5 + 5 + 5 + 5 + 5 = \boxed{25}$

- 6 There are 7 equal groups of 5 counters.

How many counters are there altogether?

There are counters altogether.

