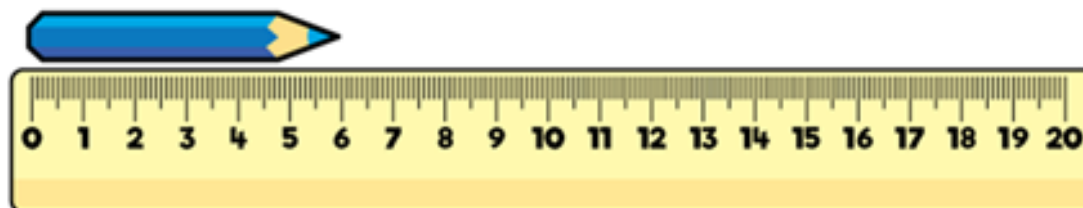





1) How long is the crayon?



2) How many more children play netball than rounders?

Sport played	Number of children
Rounders	
Netball	

Key

 = 8 children

3) What is £5 and 27 p + £6 and 50 p?

4) How many hundreds are in 462?