

Halving a Quantity

5a. Complete the statement based on the picture below.



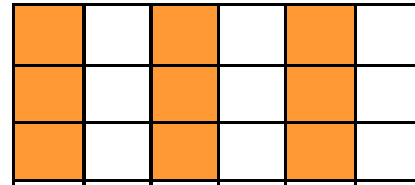
Half of _____ is _____.



VF

Halving a Quantity

5b. Complete the statement based on the picture below.



Half of _____ is _____.



VF

6a. I am thinking of a number.

Half of the number is an odd number between 8 and 10.

What number am I thinking of?



VF

6b. I am thinking of a number.

Half of the number is an odd number between 6 and 8.

What number am I thinking of?



VF

7a. Here is half. What is the total?




VF

7b. Here is half. What is the total?




VF

8a. Circle half of the cookies.



VF

8b. Circle half of the cherries.



VF