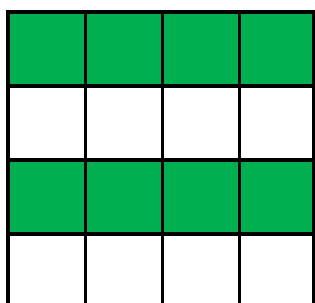


Halving a Quantity

4a. Mary thinks she has coloured in half of the squares. Do you agree?



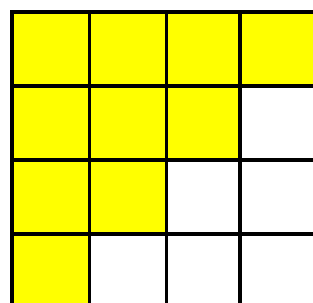
Why or why not?



R

Halving a Quantity

4b. Noah thinks he has coloured in half of the squares. Do you agree?




Why or why not?



R

5a. These flowers have been halved incorrectly. How many should be in each group?




Explain how you got your answer.



R

5b. A bag of apples has been halved incorrectly. How many should be on each plate?



Explain how you got your answer.



R

6a. Patsy bought half of all the socks on the market stall. How many socks did she buy?



PS

6b. Half of the animals at the zoo are giraffes.

There are 16 animals at the zoo.

How many giraffes are at the zoo?

Use counters or draw a picture to help you.



PS