

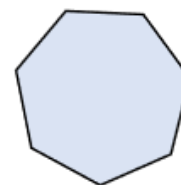
Flashback

4

Year 5 | Week 10 | Day 1

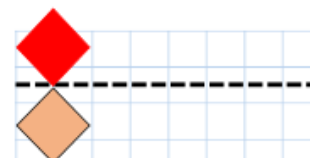

1) How many cm are there in 9.4 m?

940 cm



2) $\frac{7}{10}$ km = 700 m

3) Reflect the shape in the mirror line.



4) Which fraction is the same as 40%?

$\frac{40}{10}$ $\frac{2}{10}$ $\frac{2}{5}$ $\frac{4}{100}$

$\frac{2}{5}$