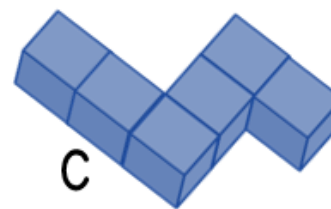
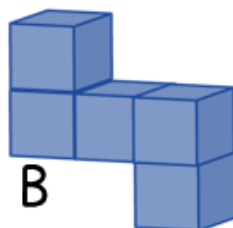
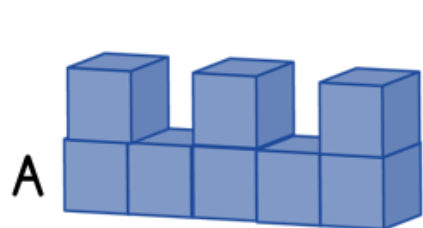


1) Put the shapes in ascending order of volume.



B, C, A

2) $\frac{1}{4}$ of an hour is equal to 15 minutes.

3) How many km are the same as 3,217 m?

3.217 km

4) What number comes next in the sequence?

879, 889, 899, 909