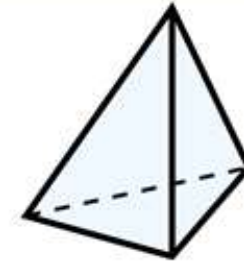
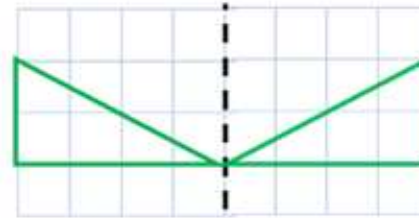


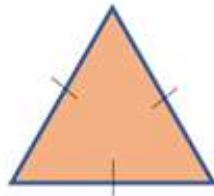
Flashback 4

Year 4

- 1) Is the shape reflected correctly?



- 2) What type of triangle is this?



- 3) What type of angle measures 90 degrees exactly?
- 4) Calculate the product of 16 and 4