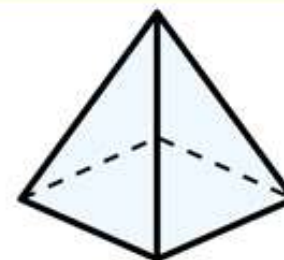
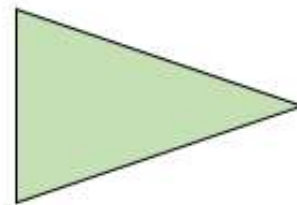
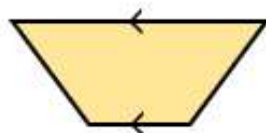


- 1) How many lines of symmetry does this triangle have? **1**



- 2) What is the mathematical name for this shape? **trapezium**



- 3) What type of angle is this?



**acute angle**

- 4) Calculate  $4 \times 7 \times 5$  **140**