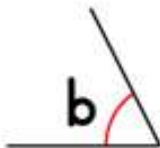
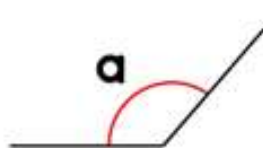
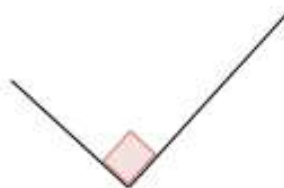


1) Which quadrilateral has exactly 1 pair of parallel sides? **trapezium**

2) Which angle is greater, a or b? **b**



3) What type of angle is shown?



**right angle**

4) Divide 892 by 4 **223**