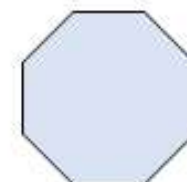


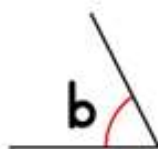
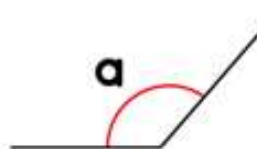
Flashback 4

Year 4

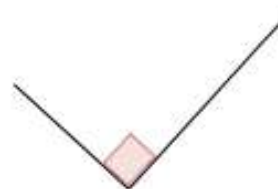


1) Which quadrilateral has exactly 1 pair of parallel sides?

2) Which angle is greater, a or b?



3) What type of angle is shown?



4) Divide 892 by 4