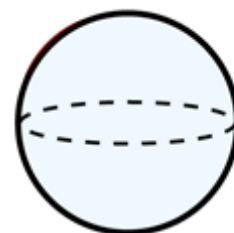


Flashback 4



Year 3 | Week 2 | Day 3

- 1) Which is greater, $\frac{3}{7}$ or $\frac{1}{7}$?

$\frac{3}{7}$



- 2) Use $<$, $>$ or $=$ to compare.



$$\frac{6}{9} = \frac{2}{3}$$

- 3) There are 12 red or green apples in a bowl.

$\frac{1}{4}$ of the apples are red. How many are green?

9

- 4) Find the difference between 87 and 254

167