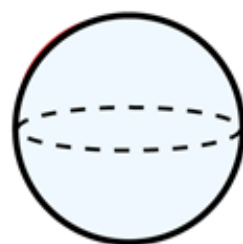


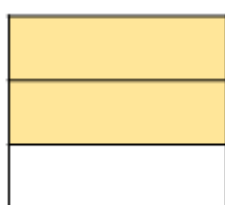
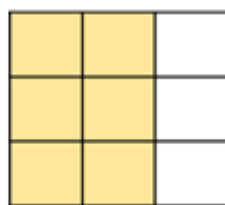
# Flashback 4

Year 3 | Week 2 | Day 3

1) Which is greater,  $\frac{3}{7}$  or  $\frac{1}{7}$ ?



2) Use  $<$ ,  $>$  or  $=$  to compare.



$$\frac{6}{9} \bigcirc \frac{2}{3}$$

3) There are 12 red or green apples in a bowl.  
 $\frac{1}{4}$  of the apples are red. How many are green?

4) Find the difference between 87 and 254