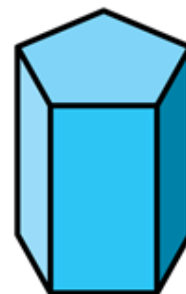
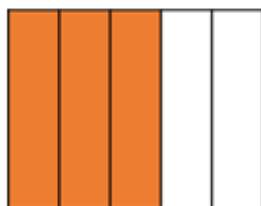
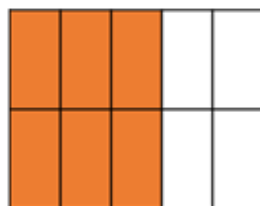


- 1) Use $<$, $>$ or $=$ to compare the fractions.

$$\frac{1}{7} \bigcirc \frac{1}{9}$$



- 2) Complete the equivalent fractions.



$$\frac{6}{10} = \frac{\quad}{5}$$

- 3) What is one fifth of 35?
- 4) Calculate £3 and 82 p + £4 and 48 p