





- 1) How many more children play football than rugby?

Sport played	Number of children
Football	
Rugby	
Netball	



Key

 = 10 children

- 2) Write 682p in pounds and pence.
- 3) Divide 48 by 2
- 4) Find the sum of 342 and 189