





- 1) How many animals are there altogether?

Animals	Number in shop
Fish	
Hamsters	
Guinea Pigs	



Key

 = 4 animals

- 2) Write 548p in pounds and pence.
- 3) Find the product of 18 and 4
- 4) What is  $345 - 100$ ?